

In Between

Write the number that is in between
the two numbers.

1	2	3	4	5	6	7	8	9	10
11	12	13	14	15	16	17	18	19	20

1 3

10 12

11 13

16 18

6 8

13 15


4 6

8 10

2 4

17 19

ANSWERS: 2, 12, 7, 5, 3, 11, 17, 14, 9, 18



What comes Before?

Write the number on the line
that comes *before* the printed number.

___	11
-----	----

___	18
-----	----

___	9
-----	---

___	16
-----	----

___	13
-----	----

___	12
-----	----

___	20
-----	----

___	4
-----	---

___	7
-----	---

___	2
-----	---




___	5
-----	---

___	6
-----	---

ANSWERS: 10, 17, 8, 15, 12, 11, 19, 3, 6, 1, 4, 5

How Many Animals?









Count the number of animals.
Then write the total in the square.



ANSWERS: 3 + 4 = 7; 4 + 5 = 9; 4 + 2 = 6; 3 + 5 = 8

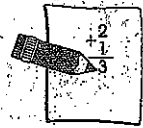
Picture Addition

Count, add and write the correct number in the box.



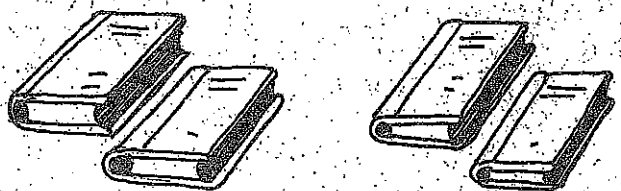
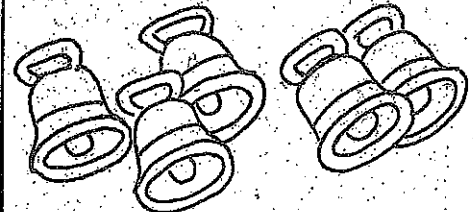






		<input data-bbox="1169 315 1388 535" type="text"/>		
4	+	2	=	
		<input data-bbox="1169 640 1388 861" type="text"/>		
3	+	3	=	
		<input data-bbox="1169 966 1388 1186" type="text"/>		
2	+	1	=	
		<input data-bbox="1169 1291 1388 1512" type="text"/>		
4	+	3	=	



QUIZ NO. 1




Direction: Write the missing numbers.

 _____ + _____ = _____	 _____ + _____ = _____
 _____ + _____ = _____	 _____ + _____ = _____
 _____ + _____ = _____	 _____ + _____ = _____
 _____ + _____ = _____	 _____ + _____ = _____
 _____ + _____ = _____	 _____ + _____ = _____



Date: _____ Name: _____

Counting by Tens




10	20	—	40	—	60
----	----	---	----	---	----

20	—	—	50	60	—
----	---	---	----	----	---

40	50	—	70	—	—
----	----	---	----	---	---

30	—	50	—	70	—
----	---	----	---	----	---



Name _____

Fill in the missing numbers.

1		3	4	
	7		9	
	12			15
		18		

Write each missing number.

1		3		5			8
9		11		13			16
17		19		21			24
25		27		29			32
33		35		37			40
41		43		45			48
			49	50			



Printable Counting Worksheet

Name _____

Fill in the missing numbers.

1			4	
	7			10
			14	
		16		18
				20

A cartoon illustration of a small dinosaur sitting on top of a cracked eggshell. The dinosaur is facing left and has a friendly expression. The eggshell is broken, showing the dinosaur's body.

Reading blends

cat

bad

bag

ban

boat

cab

can

cap

dad

dam

dad

fan

fat

gap

had

ham